

1993

## Practice Test

## PART A: MULTIPLE-CHOICE QUESTIONS

Name Key

Value: 60 (2 marks per question)


omit #26

Suggested Time: 60 minutes

**INSTRUCTIONS:** For each question, select the **BEST** answer and record your choice on the answer sheet provided. Using an **HB** pencil, completely fill in the circle that has the letter corresponding to your answer.

1. A 2.6 kg block slides down an incline of  $19^\circ$  to the horizontal at a constant speed. What is the net force on the block?

- A. 0.0 N ✓  
 B. 8.3 N  
 C. 24 N  
 D. 25 N




$$a = 0$$

$$F_{\text{net}} = ma = 0$$

2. An airplane heads due west with an airspeed of 78 m/s. The wind is blowing due north at 25 m/s. What is the speed of the airplane relative to the ground?

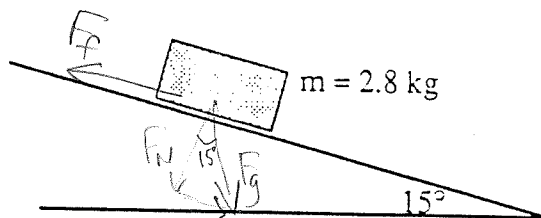
- A. 53 m/s  
 B. 78 m/s  
 C. 82 m/s ✓  
 D. 103 m/s



$$\sqrt{78^2 + 25^2} = r$$

$$r = 81.9$$

3. In the following diagram, the coefficient of friction between the 2.8 kg block and the  $15^\circ$  inclined plane is 0.268.



$$F_f = \mu F_N$$

$$= 0.268 (F_g \cos 15^\circ)$$

$$= 0.268 (2.8 \text{ kg})(9.81) \cos 15^\circ$$

$$= 7.11 \text{ N}$$

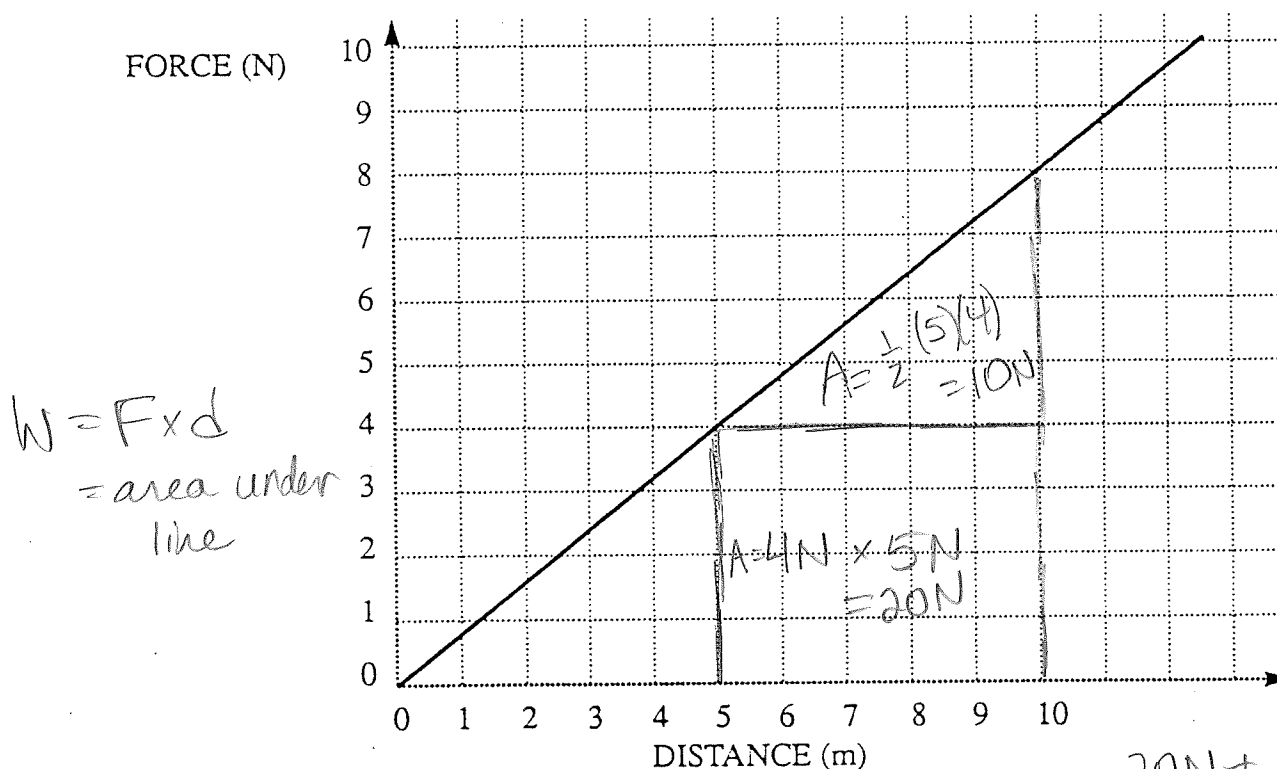
If the block does not move, what frictional force exists between the block and the surface?

- A. 2.5 N  
 B. 7.1 N ✓  
 C. 9.3 N  
 D. 9.6 N

4. Which one of the following **BEST** describes an **inelastic** collision between two objects?

	TOTAL ENERGY <i>always conserved</i>	TOTAL MOMENTUM <i>always conserved</i>	KINETIC ENERGY
A.	conserved	conserved	conserved
B.	conserved	conserved	not conserved
C.	conserved	not conserved	not conserved
D.	not conserved	not conserved	not conserved

5. The graph below shows the distance an object moved when pulled by a varying force.



How much work was done by this force in moving the object from 5.0 m to 10.0 m?

- A. 10 J  
B. 20 J  
C. 30 J ✓  
D. 40 J

6. A 5.0 kg object is dropped from a height of 28 m. The object strikes the ground with a speed of 15 m/s. How much heat energy was produced while falling?

- A.  $5.6 \times 10^2 \text{ J}$   
 B.  $8.1 \times 10^2 \text{ J}$  ✓  
 C.  $1.4 \times 10^3 \text{ J}$   
 D.  $1.9 \times 10^3 \text{ J}$

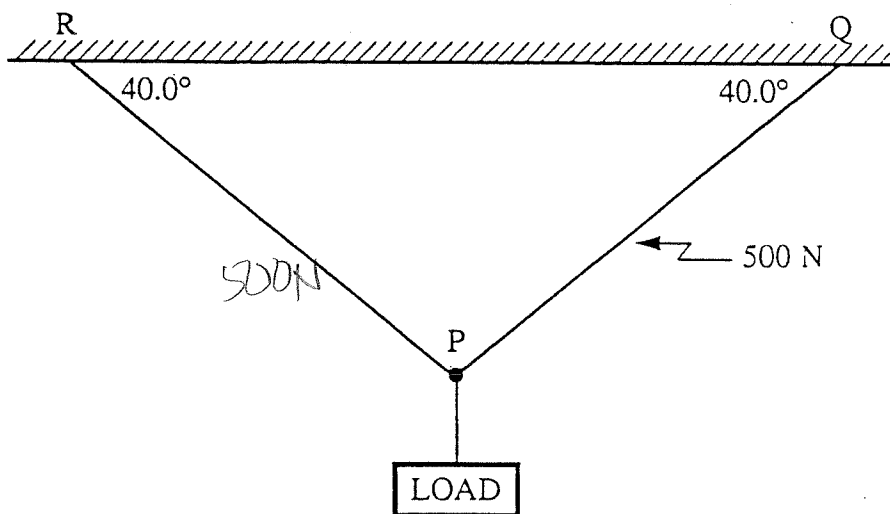
0  $E_p$   
 ↓  
 0  $E_k$

$$E_p - E_k = E_H$$

$$mgh - \frac{1}{2}mv^2 =$$

$$5(9.8)(28) - \frac{1}{2}(5)(15)^2 = 8.1 \times 10^2$$


7. A load is suspended from point P, as shown in the diagram.



same angles,  
 same  
 tensions

If the tension in the cord PQ is 500 N, what is the magnitude of the force of gravity on the load?

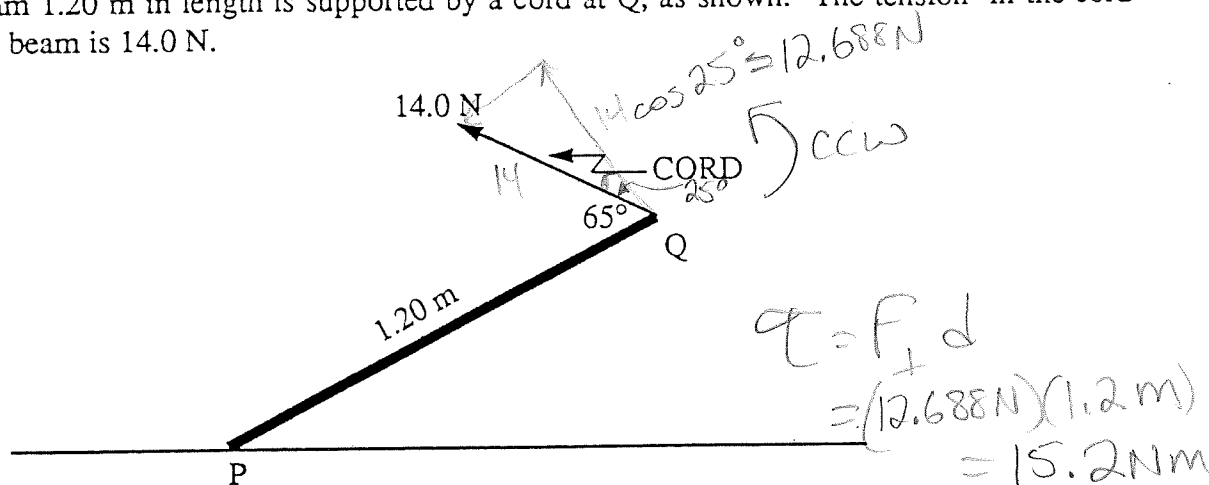
- A. 250 N  
 B. 321 N  
 C. 643 N ✓  
 D. 1000 N



$$\frac{F_g}{\sin 80^\circ} = \frac{500}{\sin 50^\circ}$$

$$F_g = 643 \text{ N}$$

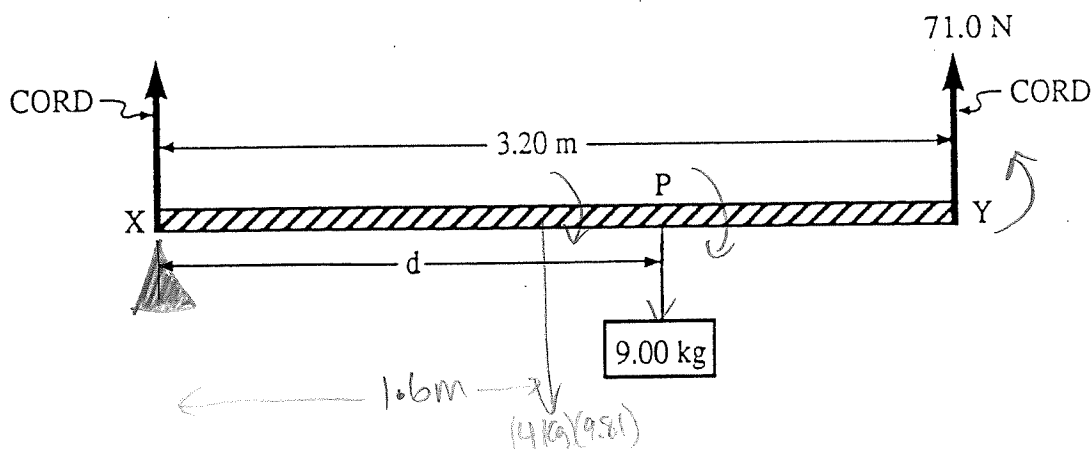
8. A uniform beam 1.20 m in length is supported by a cord at Q, as shown. The tension in the cord attached to the beam is 14.0 N.



What are the magnitude and direction of the torque about P, exerted by the cord on the beam?

	MAGNITUDE OF TORQUE	DIRECTION OF TORQUE
A.	15.2 N·m	clockwise
<u>B.</u>	15.2 N·m	<u>counterclockwise</u>
C.	16.8 N·m	clockwise
D.	16.8 N·m	<u>counterclockwise</u>

9. A uniform beam 3.20 m long has a mass of 4.00 kg. It is suspended by a cord at each end, X and Y, as shown.



When a 9.00 kg mass is suspended from point P the tension in the cord at Y is 71.0 N. What is the distance d? (not drawn to scale)

- A. 1.78 m  
B. 1.86 m  
 C. 2.21 m  
 D. 2.58 m

$$\sum \tau_{\text{cw}} = \sum \tau_{\text{ccw}}$$

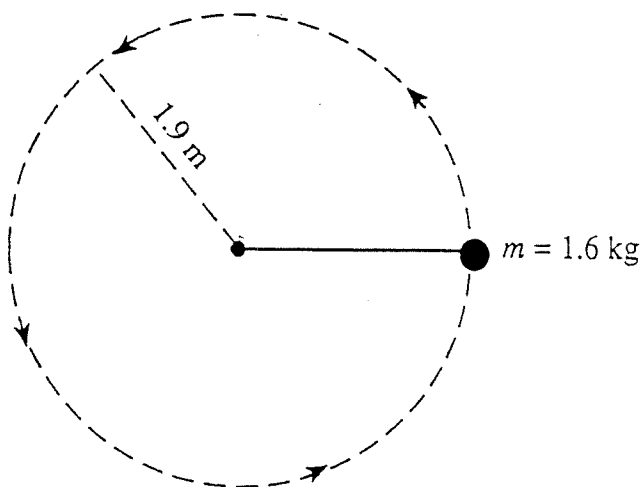
$$(4)(9.81)(1.6 \text{ m}) + (9)(9.81)(d) = 71 \text{ N}(3.2 \text{ m})$$

$$d = 1.86 \text{ m}$$

10. Which one of the following best describes an object in uniform circular motion?

	MAGNITUDE OF ACCELERATION	MAGNITUDE OF VELOCITY
A.	constant <i>always to centre</i>	constant
B.	constant	changing
C.	changing	constant
D.	changing	changing

11. The diagram below shows a 1.6 kg air puck on the end of a string. The puck is moving in a horizontal circular path of radius 1.9 m.



$$F_c = \frac{m 4\pi^2 r}{T^2}$$

$$T = \sqrt{\frac{m 4\pi^2 r}{F_c}}$$

$$= \sqrt{\frac{(1.6)(4)\pi^2(1.9\text{m})}{150\text{N}}}$$

$$= 0.89\text{ s}$$

If the tension in the string is 150 N, what is the period of revolution of the puck?

- A. 0.71 s  
 B. 0.89 s ✓  
 C. 1.1 s  
 D. 1.4 s

$$T = F_c$$

12. The force of gravity on an object at the Moon's surface is 400 N. At what distance from the centre of the Moon will the force of gravity on this object be 100 N?

- A.  $1.74 \times 10^6\text{ m}$   
 B.  $2.46 \times 10^6\text{ m}$   
 C.  $3.48 \times 10^6\text{ m}$  ✓  
 D.  $6.96 \times 10^6\text{ m}$

$$F_{g1} = 400\text{ N @ } r_1$$

$$F_g \propto \frac{1}{r^2}$$

$$r_1 = r_{\text{moon}} = 1.74 \times 10^6\text{ m}$$

$$\frac{F_{g1}}{F_{g2}} = \frac{r_2^2}{r_1^2}$$

$$\sqrt{\frac{r_1^2 F_{g1}}{F_{g2}}} = r_2 = \sqrt{\frac{(1.74 \times 10^6)^2 (400)}{100}} = 3.48 \times 10^6$$

13. A 75 000 kg spacecraft is situated at the surface of a planet. The planet has a mass of  $4.20 \times 10^{23}$  kg and a radius of  $7.20 \times 10^6$  m. What is this spacecraft's escape velocity from this planet?

- A.  $2.01 \times 10^2$  m/s  
 B.  $2.84 \times 10^2$  m/s  
 C.  $1.97 \times 10^3$  m/s  
 (D)  $2.79 \times 10^3$  m/s ✓

$$E_k = E_p$$

$$\frac{1}{2}mv^2 = G \frac{Mm}{r}$$

$$v = \sqrt{\frac{2GM}{r}} = \sqrt{\frac{2(6.67 \times 10^{-11})(4.2 \times 10^{23})}{7.2 \times 10^6}} = 2.79 \times 10^3 \frac{m}{s}$$

14. Which one of the following is a correct unit for electric field?

- A. N/A  
 B. J/C  
 C. N/A·m  
 (D) N/C ✓

$$\vec{E} = \frac{F}{Q_t}$$

15. Two electrons are separated by  $1.0 \times 10^{-10}$  m. What is the magnitude of the electrostatic force acting on each electron?

- A.  $1.2 \times 10^{-8}$  N  
 (B)  $2.3 \times 10^{-8}$  N ✓  
 C.  $1.4 \times 10^1$  N  
 D.  $1.4 \times 10^{11}$  N

$$F_e = \frac{KQq}{r^2} = \frac{9 \times 10^9 (1.6 \times 10^{-19})(1.6 \times 10^{-19})}{(1 \times 10^{-10})^2}$$

$$= 2.3 \times 10^{-8} \text{ N}$$

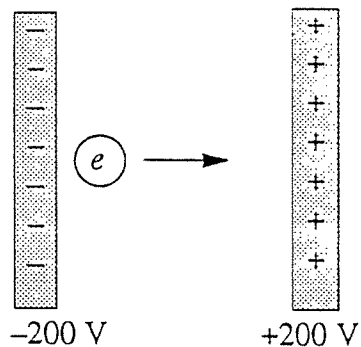
16. Two parallel metal plates are  $4.0 \times 10^{-3}$  m apart. The potential difference between them is 200 V. What is the magnitude of the uniform electric field between the plates?

- A. 0.0 V/m  
 B. 0.80 V/m  
 (C)  $5.0 \times 10^4$  V/m ✓  
 D.  $1.0 \times 10^5$  V/m

$$\vec{E} = \frac{\Delta V}{d_{\text{btwn}}} = \frac{200 \text{ V}}{4 \times 10^{-3} \text{ m}}$$

$$= 5 \times 10^4 \frac{V}{m}$$

17. An electron moves from a  $-200 \text{ V}$  plate to a  $+200 \text{ V}$  plate as shown in the diagram. The distance between the plates is  $0.080 \text{ m}$ .

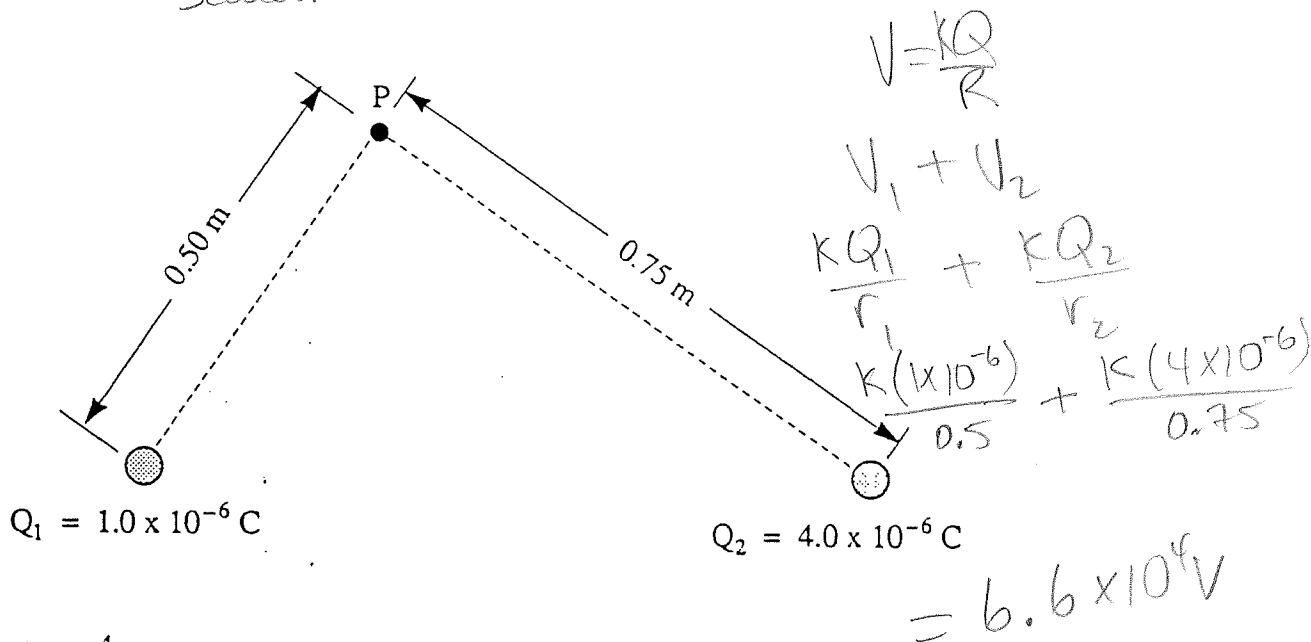


What is the kinetic energy gained by the electron as it moves from the negative to the positive plate?

- A.  $2.0 \times 10^{-18} \text{ J}$   
 B.  $6.4 \times 10^{-17} \text{ J}$  ✓  
 C.  $4.0 \times 10^{-16} \text{ J}$   
 D.  $8.0 \times 10^{-16} \text{ J}$

$$\begin{aligned}
 E_{\text{gained}} &= E_{\text{p, it had}} \\
 &= \Delta V Q \\
 &= (400 \text{ V})(1.6 \times 10^{-19} \text{ C}) \\
 &= 6.4 \times 10^{-17} \text{ J}
 \end{aligned}$$

18. What is the electric potential at point P due to charges  $Q_1$  and  $Q_2$  arranged as shown in the diagram below?




- A.  $3.0 \times 10^4 \text{ V}$   
 B.  $5.1 \times 10^4 \text{ V}$   
 C.  $6.6 \times 10^4 \text{ V}$  ✓  
 D.  $1.0 \times 10^5 \text{ V}$

19.

A boat with a speed of 2.5 m/s on still water is now in a river with a velocity of 1.0 m/s south. What is the velocity of the boat relative to the shore when the boat is headed south?

- (A) 3.5 m/s [S] ✓
- B. 1.5 m/s [N]
- C. 2.7 m/s [22° S of W]
- D. 2.5 m/s



20.

An astronaut is travelling at a constant speed of  $2.40 \times 10^8$  m/s relative to Earth through space. According to timing devices aboard the space vehicle, the trip took 1.25 years. How long did the trip last if measured relative to Earth?

- A. 0.750 years
- B. 1.25 years
- (C) 2.08 years ✓
- D. not enough information

$$t = \frac{t_0}{\sqrt{1 - \frac{v^2}{c^2}}} = \frac{1.25}{\sqrt{1 - \left(\frac{2.4 \times 10^8}{3 \times 10^8}\right)^2}} = 2.08 \text{ years}$$

21.

A  $3.0 \times 10^4$  kg truck is moving east at 8.0 m/s when it collides with a  $5.0 \times 10^4$  kg truck moving south at a velocity of 5.0 m/s. If these two vehicles lock together upon collision, what is the initial velocity of the vehicles immediately after colliding. (momentum question)

$\tan \theta = \frac{2.5 \times 10^5}{2.4 \times 10^5}$   
 $\theta = 46^\circ \text{ S of E}$

$(3 \times 10^4)(8 \text{ m/s}) = 2.4 \times 10^5$   
 $(5 \times 10^4)(5) = 2.5 \times 10^5$

$P_i = P_f$   
 $P_{i1}^2 + P_{i2}^2 = P_f^2$   
 $(2.4 \times 10^5)^2 + (2.5 \times 10^5)^2 = P_f^2$   
 $3.5 \times 10^5 = P_f = mv$   
 $\frac{346554}{(8 \times 10^4)} = v$   
 $v = 4.3 \text{ m/s}$


$P = m_T V_T$

b)  $V = 4.3 \text{ m/s} [46^\circ \text{ S of E}]$



22.

A student travelling at  $0.80c$  toward a stationary observer throws an object backward at a velocity of  $0.75c$  (relative to the student). What is the velocity of the object with respect to the stationary observer?



$$v = 0.8$$

$$u' = -0.75$$

$+$  = left

$-$  = right

A.  $0.97c$  [right]

B.  $0.13c$  [right]

C.  $0.97c$  [left]

D.  $0.13c$  [left]

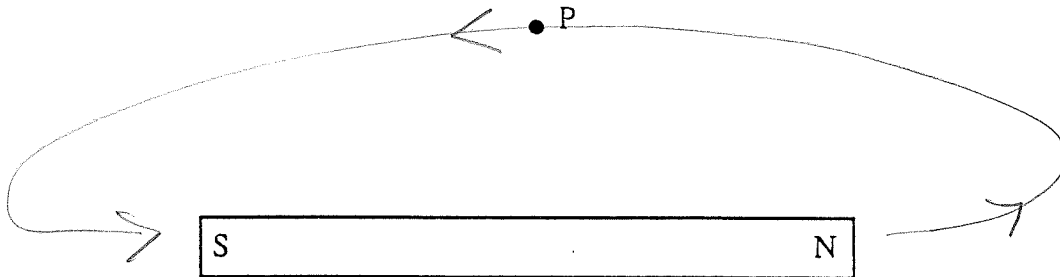
$$u = \frac{v + u'}{1 + \frac{vu'}{c^2}}$$

$$= \frac{0.8c - 0.75c}{1 + \frac{(0.8c)(-0.75c)}{c^2}} = \frac{0.05c}{0.4}$$

$$= 0.125c$$


$\uparrow$   
 $+$  = left

23. What is the direction of the magnetic field at P caused by the bar magnet as shown in the diagram below?



- A. towards the left ✓
- B. towards the right
- C. into the page
- D. out of the page

24. Which one of the following would induce a potential difference in the secondary windings of a transformer?
- A. the electric field of the secondary windings
  - B. the magnetic field of the primary windings
  - C. the changing electric field of the secondary windings
  - ☒ D. the changing magnetic field of the primary windings ✓
25. The diagram below shows a current carrying conductor. When placed in a uniform magnetic field, the magnetic force on the conductor is directed towards the top of the page as shown.



What is the direction of the magnetic field?

fingers ( $\vec{B}$ ) out of page

- ☒ A. out of the page ✓
- B. into the page
- C. towards the left
- D. towards the right

- ~~26. What is the magnitude of the magnetic field 0.17 m from a long straight conductor carrying a 4.2 A current?~~

- ☒ A.  $4.9 \times 10^{-6} \text{ T}$  ✓
- B.  $2.9 \times 10^{-5} \text{ T}$
- C.  $3.1 \times 10^{-5} \text{ T}$
- D. 3.9 T

$$B = \frac{\mu_0 I}{2\pi r}$$

$$= 4.9 \times 10^{-6} \text{ T}$$

haven't done this in our class

27. A charged particle of mass  $m$  and charge  $q$ , having been accelerated through a potential difference  $V$ , travels along a circular path of radius  $r$  at speed  $v$  in a uniform magnetic field  $B$ . What is the correct expression for the radius of this path?

- ☒ A.  $r = \frac{mv}{qB}$  ✓
- B.  $r = \frac{qB}{mv}$
- C.  $r = \frac{qmB}{2V}$
- D.  $r = \frac{2V}{qmB}$

$$F_c = F_e$$

$$\frac{mv^2}{r} = qvB$$

$$\frac{mv}{qB} = r$$

28. Find the magnetic flux through a coil of wire of area  $4.5 \times 10^{-2} \text{ m}^2$  whose plane is perpendicular to a magnetic field of magnitude  $2.0 \times 10^{-3} \text{ T}$ .

- A. 0.0 Wb  
 (B)  $9.0 \times 10^{-5} \text{ Wb}$  ✓  
 C.  $4.4 \times 10^{-2} \text{ Wb}$   
 D. 23 Wb

$$\begin{aligned}\phi &= BA \\ &= (2 \times 10^{-3} \text{ T})(4.5 \times 10^{-2} \text{ m}^2) \\ &= 9.0 \times 10^{-5} \text{ Wb}\end{aligned}$$

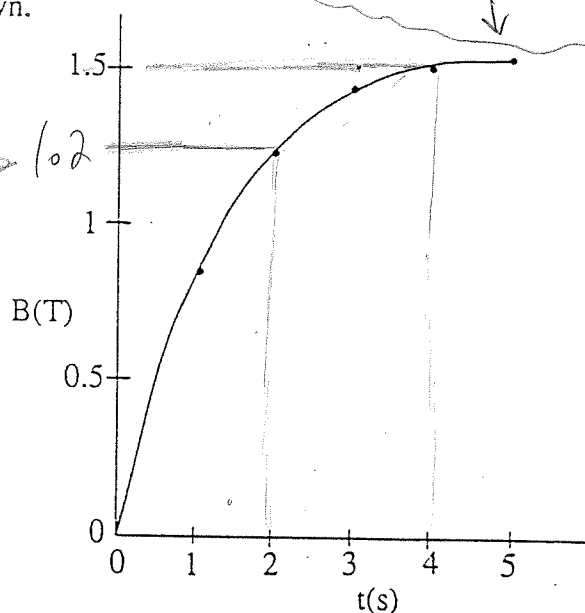
29. A DC motor is connected to a constant voltage power supply. The mechanical load on the motor increases, causing the armature to slow down. How do the back emf and current through the motor change?

	BACK emf	CURRENT
A.	Increases	Decreases
B.	Increases	Increases
(C)	Decreases	Increases
D.	Decreases	Decreases

load increases  
 → rotation slows  
 → decreases  $V_{\text{back}}$   
 → increases  $I$

30. The following data is plotted on the graph, as shown.

t(s)	B(T)
0.0	0.0
1.0	0.80
2.0	1.20
3.0	1.40
4.0	1.50
5.0	1.55



The data was obtained using a coil of 85 turns, having a cross-sectional area of  $4.0 \times 10^{-2} \text{ m}^2$ . The plane of the coil is perpendicular to the changing magnetic field (B). What is the magnitude of the average emf induced in the coil between  $t = 2.0 \text{ s}$  and  $t = 4.0 \text{ s}$ ?

- A. 0.34 V  
 (B) 0.51 V ✓  
 C. 1.6 V  
 D. 2.4 V

$$\begin{aligned}\mathcal{E} &= -N \frac{\Delta \phi}{\Delta t} \\ &= -N \frac{\Delta(BA)}{\Delta t} = \frac{85(1.5 - 1.2)(4 \times 10^{-2})}{(4 - 2)} = 0.51 \text{ V}\end{aligned}$$

This is the end of the multiple-choice section.  
 Answer the remaining questions directly in this examination booklet.