

## Lesson 3: Powers with Whole Number Exponents

Friday, August 31, 2018 2:20 AM

### Prime Factorization and Exponents Lesson #3: Powers with Whole Number Exponents

pg. 19

In this lesson we review numbers written as powers, and the exponent laws applied to powers with numerical bases and whole number exponents. We extend the work to consider bases which are variable.

#### Exponents

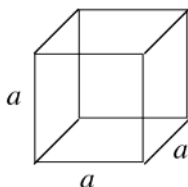
In mathematics, exponents are used as a short way to write repeated multiplication.

Expanded form

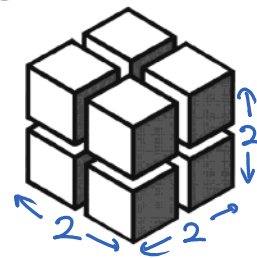
The number of small cubes in the diagram can be calculated by the repeated multiplication  $2 \times 2 \times 2$ .

This can be written in exponential form as  $2^3$ .

Exponents can also be used with variables.



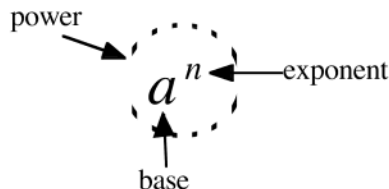
The volume of the cube to the left can be determined by repeated multiplication  $a \times a \times a$  or in exponential form  $a^3$ .



#### Powers

A power is a number written in exponential form.

It consists of a base and an exponent.



State the base and the exponent in each of the following powers.

a)  $4^5$  base 4  
exponent 5

b)  $(-3)^6$  base -3  
exponent 6

c)  $x^y$  base x  
exponent y



A number that multiplies a variable is called a coefficient.

In the expression  $7p^3$  the coefficient is 7.



State the coefficient in each of the following.

a)  $8x^2$  8

b)  $-3z^9$  -3

c)  $\frac{1}{7}a^8 = \frac{1}{7}a^8$   $\frac{1}{7}$



Note that written as a repeated multiplication  $7p^3 = 7 \times p \times p \times p$ , *\* Coefficient is not repeated*  
 whereas  $(7p)^3 = 7p \times 7p \times 7p = 7 \times p \times 7 \times p \times 7 \times p = 7 \times 7 \times 7 \times p \times p \times p = 343p^3$ .  
*7 is part of the base*



Write each of the following as a repeated multiplication.

a)  $3a^4b$  *just a is the base*  
 $3 \times a \times a \times a \times a \times b$

c)  $3(ab)^4$   
 $= 3 \times ab \times ab \times ab \times ab$   
 $= 3 \times a \times a \times a \times a \times b \times b \times b \times b$

b)  $3ab^4$   
 $3 \times a \times b \times b \times b \times b$

d)  $(3ab)^4$   
 $= 3ab \times 3ab \times 3ab \times 3ab$   
 $= 3 \times 3 \times 3 \times 3 \times a \times a \times a \times a \times b \times b \times b \times b$

### Evaluating Powers

$$10^3 = 10 \times 10 \times 10 = 1000$$

$$3^4 = 3 \times 3 \times 3 \times 3 = 81$$

$$(-6)^2 = (-6) \times (-6) = 36$$

$$-6^2 = -(6 \times 6) = -36$$
  
*not part of the base*

### The Zero Exponent

Complete the patterns below by adding one more row.

$$\begin{aligned} 10^4 &= 10000 \\ 10^3 &= 1000 \\ 10^2 &= 100 \\ 10^1 &= 10 \\ 10^0 &= 1 \end{aligned}$$

*Handwritten:  $\div 10$  between each row*

$$\begin{aligned} 3^4 &= 81 \\ 3^3 &= 27 \\ 3^2 &= 9 \\ 3^1 &= 3 \\ 3^0 &= 1 \end{aligned}$$

*Handwritten:  $\div 3$  between each row*

The results above are examples of a general rule when a base is raised to the exponent zero.  
 Complete:  $a^0 = \underline{1}$ .



Evaluate the following.

a)  $6^0$   
 $\underline{1}$

b)  $(-9)^0$   
 $\underline{1}$

c)  $-9^0 = -1$   
*not part of the base*

d)  $2(6^2)^0 = 2(1)$   
 $= 2$

### Complete Assignment Questions #1 - #7

Copyright © by Absolute Value Publications. This book is **NOT** covered by the Cancopy agreement.

## The Exponent Laws

The exponent laws with whole number exponents and numerical bases were covered in previous math courses.

The chart below extends the exponent laws to bases which are variables.

Complete the table as a review of the exponent laws.

Numerical Bases	Variable Bases	Exponent Laws
$8^3 \times 8^2 = (8 \cdot 8 \cdot 8)(8 \cdot 8)$ $= 8^5 \text{ or } 8^{3+2}$	$a^3 \times a^2 = (a \cdot a \cdot a)(a \cdot a)$ $= a^5 \text{ or } a^{3+2}$	<b>Product Law</b> $(a^m)(a^n) = a^{m+n}$
$8^3 \div 8^2 = \frac{8 \cdot 8 \cdot 8}{8 \cdot 8}$ $= 8^1 \text{ or } 8^{3-2}$	$a^3 \div a^2 = \frac{a \cdot a \cdot a}{a \cdot a}$ $= a^1 \text{ or } a^{3-2}$	<b>Quotient Law</b> $a^m \div a^n = \frac{a^m}{a^n} = a^{m-n}$ $(a \neq 0)$
$(8 \cdot 7)^3 = (8 \cdot 7)(8 \cdot 7)(8 \cdot 7)$ $= (8 \cdot 8 \cdot 8)(7 \cdot 7 \cdot 7)$ $= 8^3 \cdot 7^3$	$(a \cdot b)^3 = (a \cdot b)(a \cdot b)(a \cdot b)$ $= (a \cdot a \cdot a)(b \cdot b \cdot b)$ $= a^3 b^3$	<b>Power of a Product Law</b> $(ab)^m = a^m b^m$
$\left(\frac{8}{7}\right)^3 = \left(\frac{8}{7}\right)\left(\frac{8}{7}\right)\left(\frac{8}{7}\right)$ $= \frac{8^3}{7^3}$	$\left(\frac{a}{b}\right)^3 = \left(\frac{a}{b}\right)\left(\frac{a}{b}\right)\left(\frac{a}{b}\right)$ $= \frac{a^3}{b^3}$	<b>Power of a Quotient Law</b> $\left(\frac{a}{b}\right)^n = \frac{a^n}{b^n}$ $(b \neq 0)$
$(8^3)^2 = (8^3)(8^3)$ $= (8 \cdot 8 \cdot 8)(8 \cdot 8 \cdot 8)$ $= 8^6 \text{ or } 8^{3 \times 2}$	$(a^3)^2 = (a^3)(a^3)$ $= (a \cdot a \cdot a)(a \cdot a \cdot a)$ $= a^6 \text{ or } a^{3 \times 2}$	<b>Power of a Power Law</b> $(a^m)^n = a^{mn}$

bases must be the same

Copyright © by Absolute Value Publications. This book is **NOT** covered by the Cancopy agreement.

$$3 \boxed{x^y} 6$$

$$\boxed{\wedge}$$



Use the exponent laws to simplify and then evaluate.

$$\begin{aligned} \text{a) } 3^4 \cdot 3^2 &= 3^{4+2} \\ &= 3^6 \\ &= 729 \end{aligned}$$

$$\begin{aligned} \text{b) } \frac{(-2)^5}{(-2)^3} &= (-2)^{5-3} \\ &= (-2)^2 \\ &= 4 \end{aligned}$$

$$\begin{aligned} \text{c) } (5^2)^3 &= 5^{2 \times 3} \\ &= 5^6 \\ &= 15625 \end{aligned}$$



Use the exponent laws to simplify.

$$\begin{aligned} \text{a) } (a)^4(a)^3 &= a^7 \end{aligned}$$

$$\text{b) } x^6x = x^7$$

$$\text{c) } b^7 \times b^0 \times b^4 = b^{11}$$

$$\text{d) } \frac{x^8}{x^4} = x^{8-4}$$

$$\text{e) } \frac{y^{10}}{y^2} = y^{10-2}$$

$$\text{f) } (a^4)^3 = a^{12}$$

$$\begin{aligned} \text{g) } (y^5)^5 &= y^{5 \times 5} \\ &= y^{25} \end{aligned}$$

$$\begin{aligned} \text{h) } \left(\frac{x}{y}\right)^9 &= \frac{x^9}{y^9} \end{aligned}$$

$$\begin{aligned} \text{i) } \left(\frac{c}{4}\right)^2 &= \frac{c^2}{4^2} \\ &= \frac{c^2}{16} \end{aligned}$$

$$\text{j) } (st)^6 = s^6t^6$$

$$\begin{aligned} \text{k) } (2a)^5 &= 2^5a^5 \\ &= 32a^5 \end{aligned}$$

$$\begin{aligned} \text{l) } (-3pq)^4 &= (-3)^4p^4q^4 \\ &= 81p^4q^4 \end{aligned}$$

### Complete Assignment Questions #8 - #22

## Assignment

1. State the base and the exponent in each of the following powers.

$$\text{a) } 8^3$$

$$\text{b) } k^{15}$$

$$\text{c) } 2^x$$

$$\text{d) } (-x)^4$$

$$\text{e) } \left(\frac{3}{4}\right)^6$$

2. State the coefficient in each of the following.

$$\text{a) } 5x^7$$

$$\text{b) } -6z^2$$

$$\text{c) } a^3$$

$$\text{d) } \frac{y^3}{4}$$

$$\text{e) } \frac{5y^9}{8}$$

3. Write each of the following as a repeated multiplication.

$$\text{a) } c^4$$

$$\text{b) } 5x^3$$

$$\text{c) } (ab)^2$$

$$\text{d) } (-5)^3$$

$$\text{e) } s^2t$$

$$\text{f) } 2\left(\frac{5}{4}\right)^3$$

$$\text{g) } (4a)^3$$

$$\text{h) } 3cd^2$$

$$\text{i) } 3(cd)^2$$

$$\text{j) } (3cd)^2$$